

# Extensions Unit, Station 4, Round 2, Task 2



Finding Perimeter

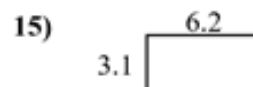

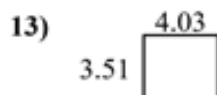
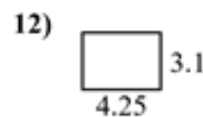
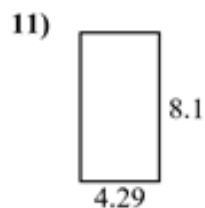
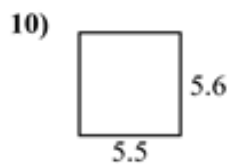
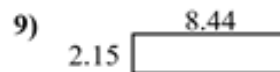
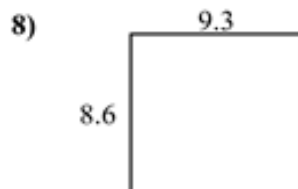
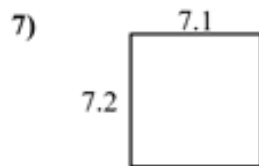
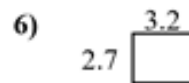
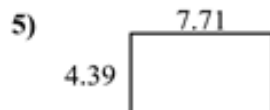
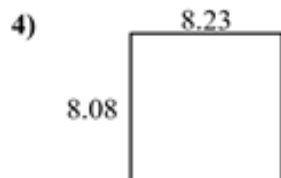

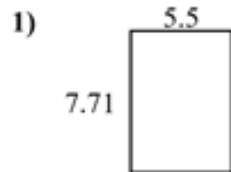
with Decimals

Name: \_\_\_\_\_

Find the perimeter  
to scale.

of each figure. Each figure is in centimeters (cm). Not

Answers



1. \_\_\_\_\_

2. \_\_\_\_\_

3. \_\_\_\_\_

4. \_\_\_\_\_

5. \_\_\_\_\_

6. \_\_\_\_\_

7. \_\_\_\_\_

8. \_\_\_\_\_

9. \_\_\_\_\_

10. \_\_\_\_\_

11. \_\_\_\_\_

12. \_\_\_\_\_

13. \_\_\_\_\_

14. \_\_\_\_\_

15. \_\_\_\_\_